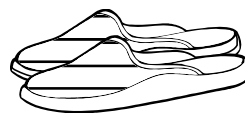

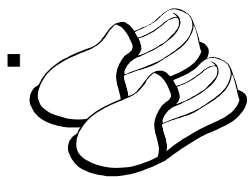


Μαθηματικά Α'



1. Συμπληρώνω τα κενά:



$$\square + \square + \square = \square$$

$$\square \times \square = \square$$


■



$$\square + \square = \square$$

$$\square \times \square = \square$$



■



$$\square + \square = \square$$

$$\square \times \square = \square$$

■

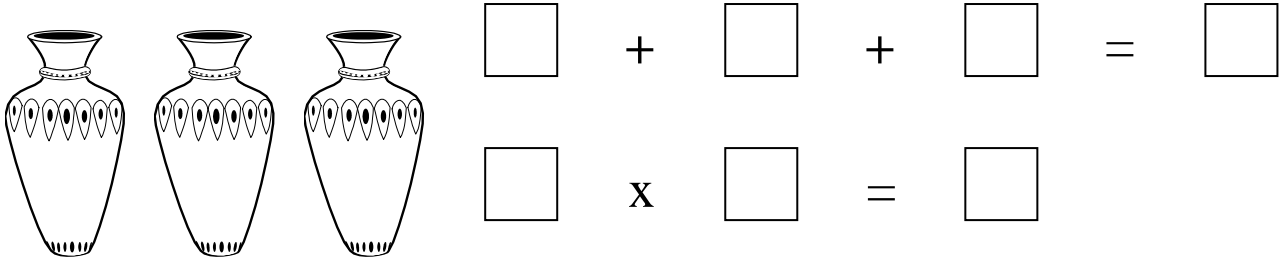


$$\square + \square + \square + \square = \square$$

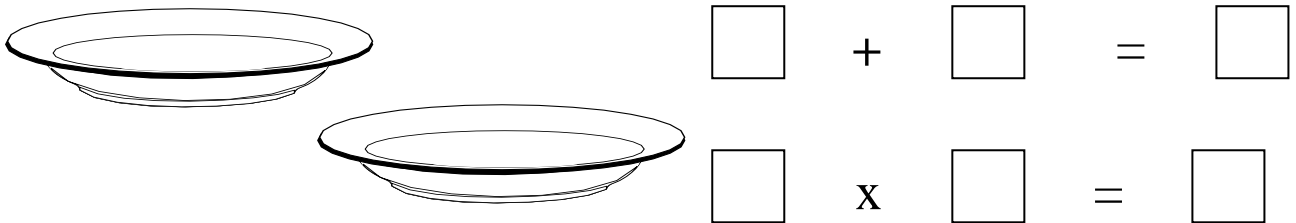
$$\square \times \square = \square$$

2. Κάνω σχέδιο και συμπληρώνω:

- 3 λουλούδια σε κάθε βάζο



- 4 μήλα σε κάθε πιάτο



3. Κάνω σχέδιο για τις μαθηματικές προτάσεις:

$3 \times 2 = \underline{\quad}$	$5 \times 1 = \underline{\quad}$
$4 \times 2 = \underline{\quad}$	$1 \times 6 = \underline{\quad}$

Όνομα: Ημερομηνία: